


Zadanie 7



Sprawdź czy wszystkie cyfry zostały prawidłowo wpisane.


Policz ile biedronek jest razem?




$$3 + 3 = \underline{\quad}$$




$$2 + 4 = \underline{\quad}$$




$$2 + 3 = \underline{\quad}$$




$$5 + 1 = \underline{\quad}$$




$$2 + 6 = \underline{\quad}$$



$$2 + 2 = \underline{\quad}$$



$$3 + 5 = \underline{\quad}$$



$$7 + 2 = \underline{\quad}$$



$$1 + 2 = \underline{\quad}$$